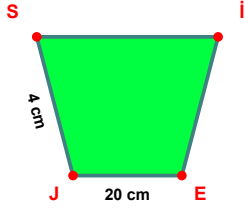
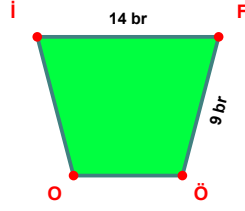


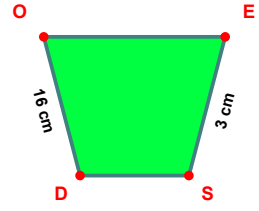
SORU: Aşağıdaki şekillerde verilen, kenar uzunlukları farklarını bulunuz.



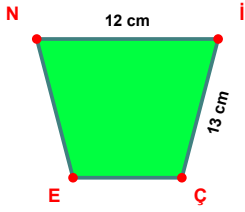
$$|EJ| - |JS| = \dots\dots\dots$$



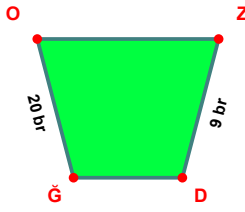
$$|IF| - |FÖ| = \dots\dots\dots$$



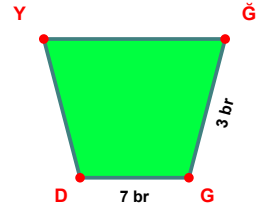
$$|DO| - |ES| = \dots\dots\dots$$



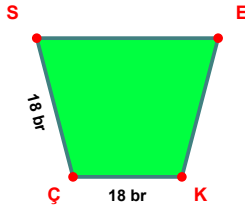
$$|İÇ| - |Nİ| = \dots\dots\dots$$



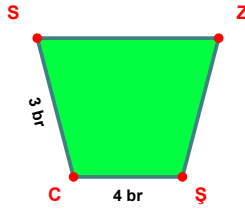
$$|ĞO| - |ZD| = \dots\dots\dots$$



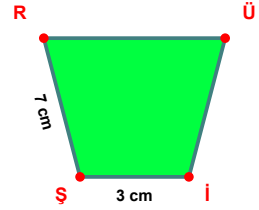
$$|GD| - |ĞG| = \dots\dots\dots$$



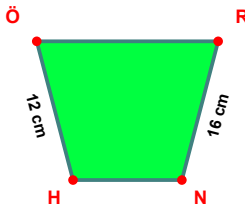
$$|ÇS| - |KÇ| = \dots\dots\dots$$



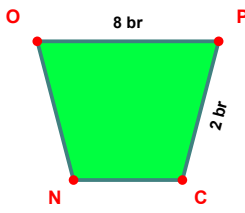
$$|ŞC| - |CS| = \dots\dots\dots$$



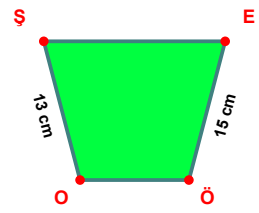
$$|ŞR| - |İŞ| = \dots\dots\dots$$



$$|RN| - |HÖ| = \dots\dots\dots$$

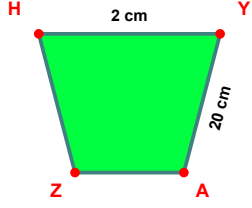


$$|OP| - |PC| = \dots\dots\dots$$

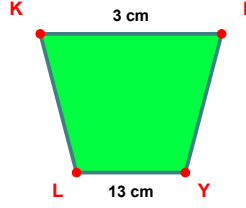


$$|EÖ| - |OŞ| = \dots\dots\dots$$

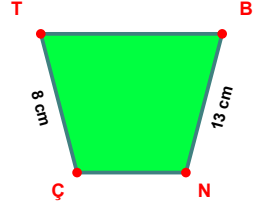
SORU: Aşağıdaki şekillerde verilen, kenar uzunlukları farklarını bulunuz.



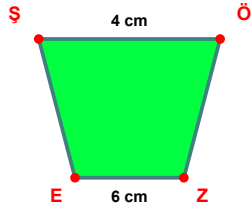
$|YA| - |HY| = \dots\dots\dots$



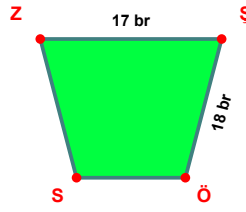
$|YL| - |KI| = \dots\dots\dots$



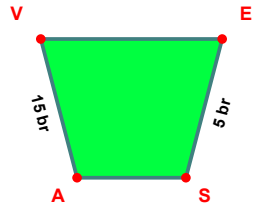
$|BN| - |ÇT| = \dots\dots\dots$



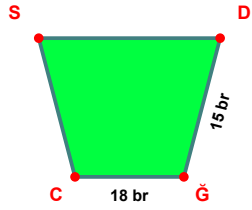
$|ZE| - |ŞÖ| = \dots\dots\dots$



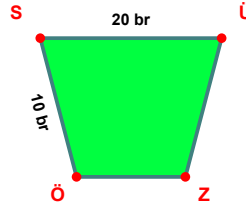
$|ŞÖ| - |ZŞ| = \dots\dots\dots$



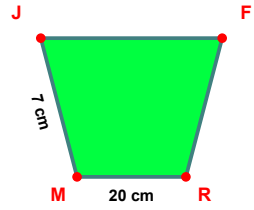
$|AV| - |ES| = \dots\dots\dots$



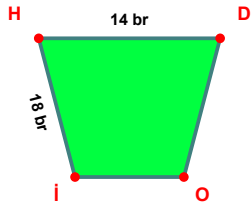
$|ÇC| - |DÇ| = \dots\dots\dots$



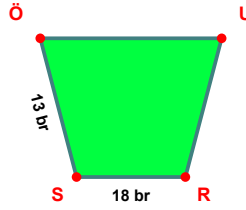
$|SÜ| - |ÖS| = \dots\dots\dots$



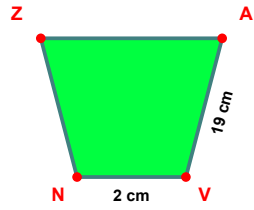
$|RM| - |MJ| = \dots\dots\dots$



$|İH| - |HD| = \dots\dots\dots$



$|RS| - |SÖ| = \dots\dots\dots$



$|AV| - |VN| = \dots\dots\dots$

SÜREÇ ODAKLI DEĞERLENDİRME ÖLÇEĞİ

Doğru Sayısı: / 24

Öğretmen ilgili kutucuğu işaretler.

Geliştirilmeli (0-8)

İyi (9-14)

Çok İyi (15-20)

Mükemmel (21-24)

☐☐☐☐

Hazırlayan:

Bu bölüme sınıfınızın ilgili kazanıma yönelik genel durumuna ilişkin gözlem ve izlenimlerinizi, öğrencilerinizin bu kazanımla ilgili öğrenme eksikliklerini ve bu eksikliklerin giderilmesi amacıyla yaptığınız/yapmayı planladığınız faaliyetleri not edebilirsiniz.

No	Adı - Soyadı	Toplam Puan	Değerlendirme
1			
2			
3			
4			
5			
6			
7			
8			
9			
10			
11			
12			
13			
14			
15			
16			
17			
18			
19			
20			
21			
22			
23			
24			
25			
26			
27			
28			
29			
30			
31			
32			
33			
34			
35			

Hazırlayan: